

sigma notation Σ

Diagram illustrating sigma notation with annotations:

- start at this value: points to the lower limit $n=1$.
- go to this value: points to the upper limit 4 .
- what to sum: points to the term n .

$$\sum_{n=1}^4 n = 1+2+3+4 = 10$$

Handwritten example:

$$\sum_{k=4}^8 k^3 = 4^3 + 5^3 + 6^3 + 7^3 + 8^3$$

$$\sum_{k=1}^5 2k = 2+4+6+8+10$$

$$\sum_{k=1}^5 2k-1 = 1+3+5+7+9 = \sum_{k=0}^4 2k+1$$

$$\sum_{k=1}^5 (-1)^k (2k-1) = -1+3-5+7-9$$

$$\sum_{k=1}^3 k \sin \frac{k\pi}{5} = \sin \frac{\pi}{5} + 2 \sin \frac{2\pi}{5} + 3 \sin \frac{3\pi}{5}$$



$$\sum_{i=1}^5 2 = 2+2+2+2+2$$

$$\sum_{k=1}^5 2k = 2k+2k+2k+2k+2k$$

$$\sum_{j=0}^2 X^3 = X^3+X^3+X^3$$

$$\sum_{k=1}^5 2k = 2 + 4 + 6 + 8 + 10$$

$$= \sum_{k=0}^4 (2k+2) = \sum_{k=2}^6 (2k-2)$$

ex 2

$$\sum_{k=3}^7 5^{k-2}$$

lower limit = 0, not 3
so let $j = k - 3$

$$\sum_{j=0}^4 5^{(j+3)-2} = \sum_{j=0}^4 5^{j+1} = \sum_{k=0}^4 5^{k+1}$$

$k = j + 3$

page 399: algebraic properties of sigma notation

$$\sum_{k=1}^n c a_k = c \sum_{k=1}^n a_k$$

$$\sum_{k=1}^n (a_k \pm b_k) = \sum_{k=1}^n a_k \pm \sum_{k=1}^n b_k$$

theorems involving sigma notation

$$\sum_{k=1}^n k = 1 + 2 + \dots + n = \frac{n(n+1)}{2}$$

$$\sum_{k=1}^n k^2 = 1 + 4 + 9 + \dots + n^2 = \frac{(2n+1)(n+1)(n)}{6}$$

$$\sum_{k=1}^n k^3 = 1 + 8 + 27 + \dots + n^3 = \left[\frac{n(n+1)}{2} \right]^2$$

ex 3,4

$$\begin{aligned}\sum_{k=1}^{30} k(k+1) &= \sum_{k=1}^{30} k^2 + k = \sum_{k=1}^{30} k^2 + \sum_{k=1}^{30} k \\ &= \frac{(n)(n+1)(2n+1)}{6} + \frac{n(n+1)}{2} \\ &= \frac{(30)(31)(61)}{6} + \frac{30(31)}{2} \\ &= 9920\end{aligned}$$

$$\sum_{k=1}^n (3+k)^2 = \sum_{k=1}^n (9+6k+k^2)$$

$$= \sum_{k=1}^n 9 + \sum_{k=1}^n 6k + \sum_{k=1}^n k^2$$

$$= 9n + 6 \sum_{k=1}^n k + \frac{n(n+1)(2n+1)}{6}$$

$$= 9n + 6 \left(\frac{n(n+1)}{2} \right) + \frac{n(n+1)(2n+1)}{6} = \frac{1}{3}n^3 + \frac{7}{2}n^2 + \frac{73}{6}n$$

"closed sum"

(after some simplifying) ☺

$$44) \sum_{k=1}^{50} \left(\frac{1}{k} - \frac{1}{k+1} \right)$$

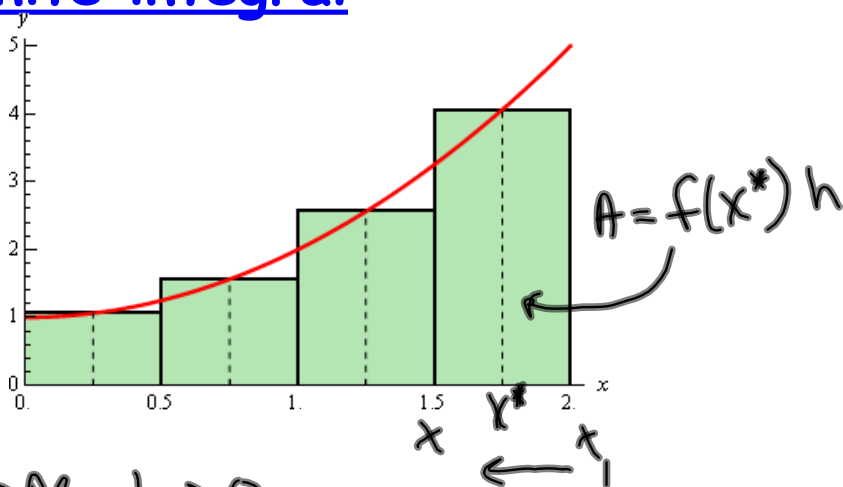
$$= \left[\frac{1}{1} - \frac{1}{2} \right] + \left[\frac{1}{2} - \frac{1}{3} \right] + \left[\frac{1}{3} - \frac{1}{4} \right]$$

$$= \left[1 - \frac{1}{2} \right] + \dots + \left[\frac{1}{50} - \frac{1}{51} \right]$$

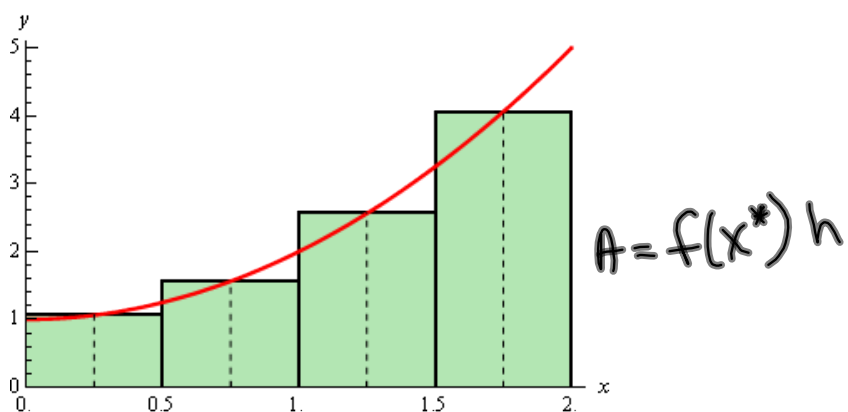
$$= 1 - \frac{1}{51} = \frac{50}{51}$$

"telescoping"
sum

The definite integral



regardless of the choice of x^* for the height of the rectangle (left, center, right) all these x^* 's approach x as the width of the interval approaches 0



$$A = \lim_{n \rightarrow \infty} \sum_{i=1}^n f(x_i) \Delta x$$

look at the sum of the areas of the rectangles. As the number of rectangles gets large without bound, the limit of that sum is the area under the curve

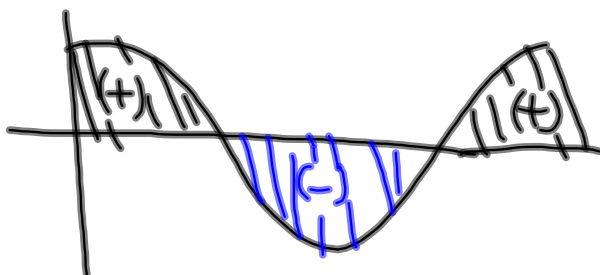
$$A = A$$

$$\int_a^b f(x) dx = \lim_{n \rightarrow \infty} \sum_{i=1}^n f(x_i^*) \Delta x$$

$[a, b]$

Riemann sum
"definite" integral

look at fig 7.5.8 top of page 408

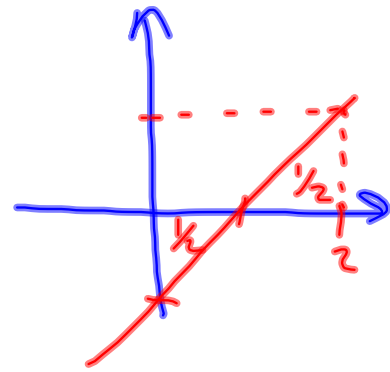


in a sum these will
cancel!

$$\text{ex 3} \quad y = x - 1$$

$$\int_0^2 (x-1) dx = 0$$

$$\int_0^1 (x-1) dx = -\frac{1}{2}$$



7.5.3 pg 411

$$\int_a^a f(x) dx = 0$$

$$\int_a^b f(x) dx = - \int_b^a f(x) dx$$

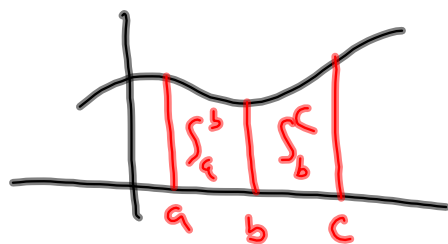
7.5.4 pg 411

$$\int_a^b c f(x) dx = c \int_a^b f(x) dx$$

$$\int_a^b (f(x) \pm g(x)) dx = \int_a^b f(x) dx \pm \int_a^b g(x) dx$$

7.5.5 p412

$$\int_a^c f(x) dx = \int_a^b f(x) dx + \int_b^c f(x) dx \quad a < b < c$$



ex 5 p 413

$$\int_0^1 5 - 3\sqrt{1-x^2} dx$$

$$= \int_0^1 5 dx - 3 \int_0^1 \sqrt{1-x^2} dx$$



$$= 5 - 3 \left(\frac{\pi}{4} \right) = 5 - 3 \frac{\pi}{4}$$

$$y = \sqrt{1-x^2}$$

$$y^2 = 1-x^2$$

$$x^2 + y^2 = 1$$

HW:

p402 1b,5,19,25,43

p414 17c,19c,21,23,25,33,37